

L.O. I can begin to understand division as grouping.

Question 1

Put the flowers into **groups of 2**.

How many groups can you make?

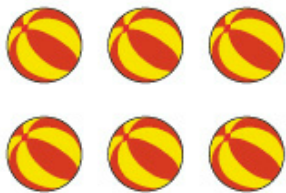


$4 \div 2 = \underline{\quad}$

Question 2

Put the balls into **groups of 2**.

How many groups can you make?




$6 \div 2 = \underline{\quad}$

Question 3

Put the sheep into **groups of 2**.

How many groups can you make?




$8 \div 2 = \underline{\quad}$

Question 4

Put the suns into **groups of 5**.

How many groups can you make?




$10 \div 5 = \underline{\quad}$

Question 5

Put the elephants into **groups of 5**.

How many groups can you make?




$15 \div 5 = \underline{\quad}$

Challenge question:

Put the pigs into **groups of 2**.

How many groups are there?



Can you write a number sentence to show what you have done?
