


Year 2

Thursday 24th February 2021

LO: I am getting better at accurately measuring to the nearest mm.

Today I would like you to practice your measuring skills and answer the questions below. You are measuring in cm.



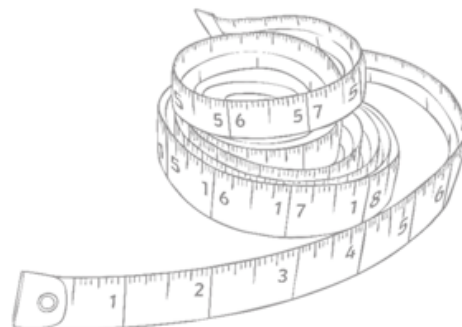
a) The height of the house to the top of the roof, not including the chimney.

b) The width of the door.

c) The height of the window.

d) The width of the house.

e) The height of the chimney.



2a. The children are talking about units of measure.



I think you would use millimetres to measure the length of a full stop.



I think you would use centimetres to measure the length of a full stop.

Who do you agree with? Explain why.



3 R

1a. Match each image to its length.



2cm



3cm

4cm



3 VF

2a. Imagine these objects are their usual size and match them to the most suitable length measurement.



fly



cat

50cm


6mm

Extension

9a. Match each image to its length.



38mm



3cm and 1mm

5cm and 2mm



46mm

Can you estimate the following items and then measure them to see how accurate you are?

Item	Estimate	Exact
Sock		
Pen		
TV Remote		