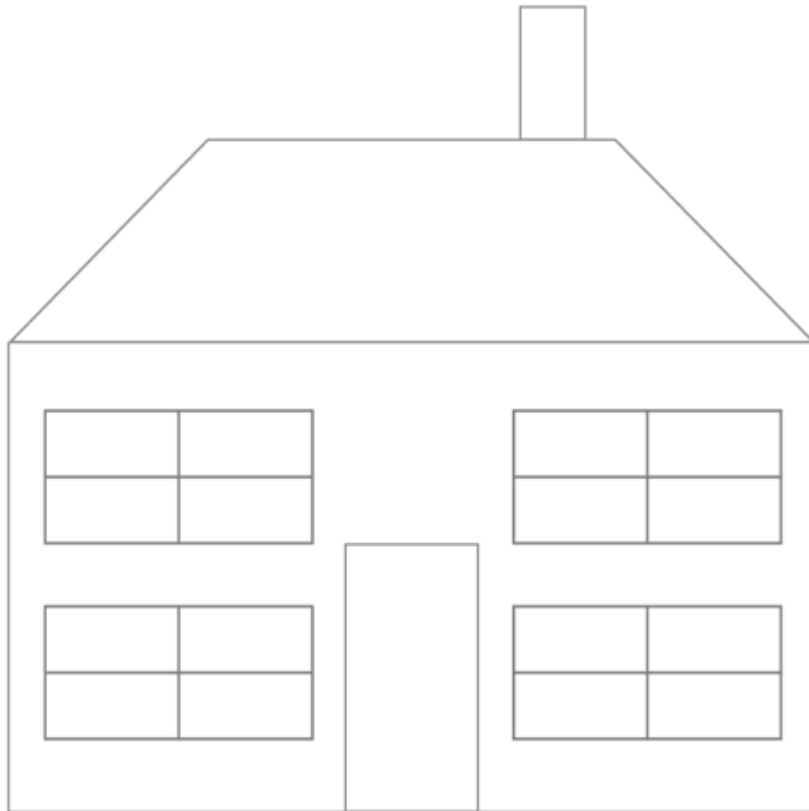


Year 1

Thursday 24th February 2021

LO: I am getting better at accurately measuring in cm.

Today I would like you to practice your measuring skills and answer the questions below. You are measuring in cm.



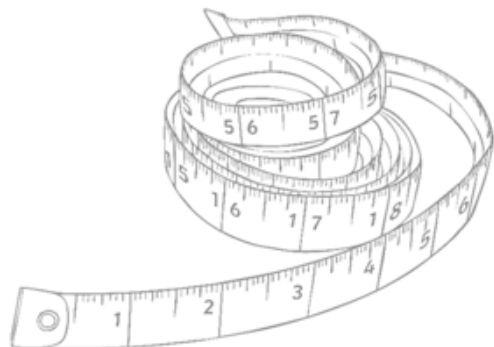
a) The height of the house to the top of the roof, not including the chimney.

b) The width of the door.

c) The height of the window.

d) The width of the house.

e) The width of the chimney.



Measure Length (cm)



My longest animal is between 22cm and 26 cm.

My shortest animal is between 12cm and 16cm.



What are all the possible lengths of the longest animal?

What are all the possible lengths of the shortest animal?

What lengths could the other animals be?

Rosie has used the ruler to measure the height of the robot.

Rosie says

The robot is 10 centimetres tall.




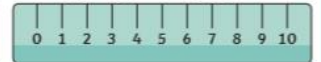
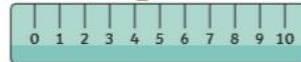
Do you agree?
Explain your answer.



Measure Length (cm)

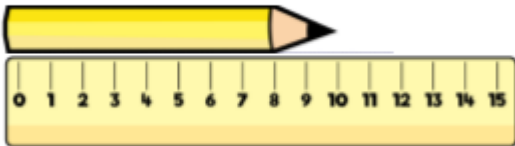


Which is the odd one out?
Explain why.



Can you write some tips to help a friend measure accurately?

Teddy measures the length of the pencil.



He says,



The length of the pencil is 10 cm.

Do you agree with Teddy?
Explain why.