

Year 2

Tuesday 23rd February 2021

LO: I am getting better at comparing and ordering height and length and can use the correct vocabulary.

Item	Non -standard unit (how many)
Pencil	8 blocks
Book	14 blocks
Height of your favourite toy	19 blocks
Felt tip pen	6 blocks
Can of food	10 blocks
Your foot	22 blocks

- Which is the longest item?

- Which is the shortest item?


- What is the difference between the longest and shortest item?

- Can you put your items in order from longest to the shortest?

- How much shorter was the felt tip pen than the foot?

- How much longer was the toy than the pencil?

9a. Which towers are equal in length?



Explain how you know.

A green pencil is twice as long as a blue pencil.



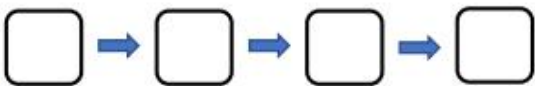
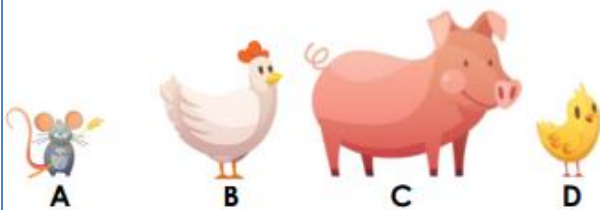
Using this, complete the statements using **longer than**, **shorter than** or **equal to**.

3 green pencils are _____ 2 blue pencils

2 green pencils are _____ 5 blue pencils

4 green pencils are _____ 8 blue pencils

8a. Put the animals in order from shortest to tallest.



Four children are measuring their heights.

Eva is taller than Rosie, but not as tall as Mo.

Dexter is taller than Mo.

Write down their names in order of their heights, starting with the shortest.

Compare the vehicles using the words to help you.



length height
longer same
taller shorter

A blue wand is three times as long as a pink wand.



Using this, complete the statements using longer than, shorter than or equal to.

2 blue wands are _____ 3 pink wands

5 pink wands are _____ 2 blue wands

3 blue wands are _____ 9 pink wands

16 pink wands are _____ 3 blue wands

Compare Lengths



Compare the lengths of the animals.
Which words complete each sentence?

A longer than

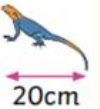
B shorter than

C the same as



12cm

The frog is ___ the lizard.



20cm



10cm

The caterpillar is ___ the butterfly.



10cm



30cm

The toucan is ___ the parrot.



30cm