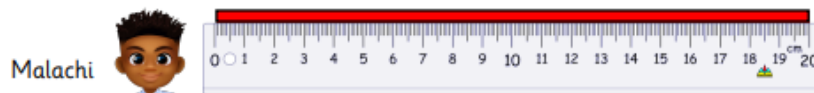
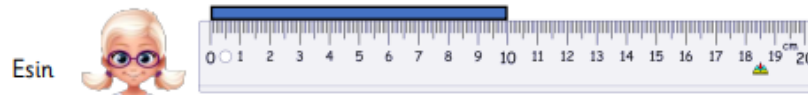


Thursday 4th March 2021 – Year 1

LO: I am getting better at solving problems linked to measure.

Esin, Leanna and Malachi each have a piece of paper strip.




- How much longer is Malachi's paper strip than Leanna's? _____ cm
- How much longer is Leanna's paper strip than Esin's? _____ cm
- Leanna and Esin put their paper strip together. What is the total length they now have? _____ cm
- Malachi cuts his paper strip in half. What is the length of each piece? _____ cm

Drew is playing with his toys.
The fire engine is 12 cm long. The plane is 8 cm longer.
How long is the plane?

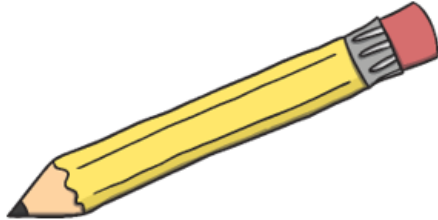


Drew is playing with his toys.
The train is double the length of the car.
How long is the train?



Length Word Problems

4. Jamie's pencil was seven centimetres long. After he sharpened the pencil, it was four centimetres long. How many centimetres shorter is the pencil?



Length Word Problems

2. Becky's teddy bear is 18 centimetres long. Diane's teddy bear is 21 centimetres long. How much longer is Diane's doll?



Length Word Problems

3. Tom cut some ribbon for a project. He cut nine metres of red ribbon and seven metres of green ribbon. How much ribbon did he cut in all?

