


Wednesday 3<sup>rd</sup> March 2021


LO: I am getting better at ordering measurements. (Year 2)

Spot the mistakes and change the names to make the sentences correct.

Tia



Leanna



Malachi



Zach



Tia's strip is longer than Malachi's  
but shorter than Leanna's.

Malachi's strip is shorter than Tia's  
but longer than Zach's.

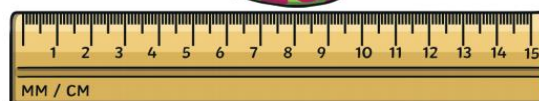
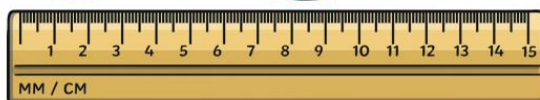
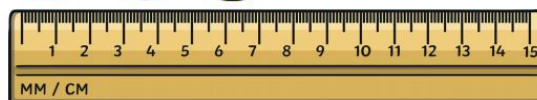
Leanna has the shortest strip and  
Malachi has the longest strip.

Malachi's has the second longest strip  
and Tia has the third shortest strip.

### Order Lengths



I have ordered the  
toy snakes from  
shortest to longest.



Do you agree? Explain why.

How would you order the snakes?

## Order Lengths



4 friends are ordering their younger brothers and sisters from **shortest** to **tallest**.



Hari

James

Anita

Sam

Anita is 70cm tall. She is the shortest.

Hari is 5cm taller than Anita.

Sam is the tallest. She is 85cm tall.

James is taller than Hari but shorter than Sam.

Write their names in order of shortest to tallest.

Name				
------	--	--	--	--

Four children are measuring their heights.

Rosie is taller than Esin, but not as tall as Zach.

Tia is taller than Zach.

Write down their names in order of their heights, starting with the tallest.